

IB Maths: AA HL

Trigonometry

Topic Questions

These practice questions can be used by students and teachers and is Suitable for
IB Maths AA HL Topic Questions

Course	IB Maths
Section	3. Geometry & Trigonometry
Topic	3.4 Trigonometry
Difficulty	Medium

Level: IB Maths

Subject: IB Maths AA HL

Board: IB Maths

Topic: Trigonometry

Question 1

Complete the table.

Degrees	Radians	sin	cos	tan
	$\frac{\pi}{6}$		$\frac{\sqrt{3}}{2}$	
45°			$\frac{1}{\sqrt{2}}$	
60°	$\frac{\pi}{3}$			
	$\frac{2\pi}{3}$	$\frac{\sqrt{3}}{2}$		
270°				

[5 marks]

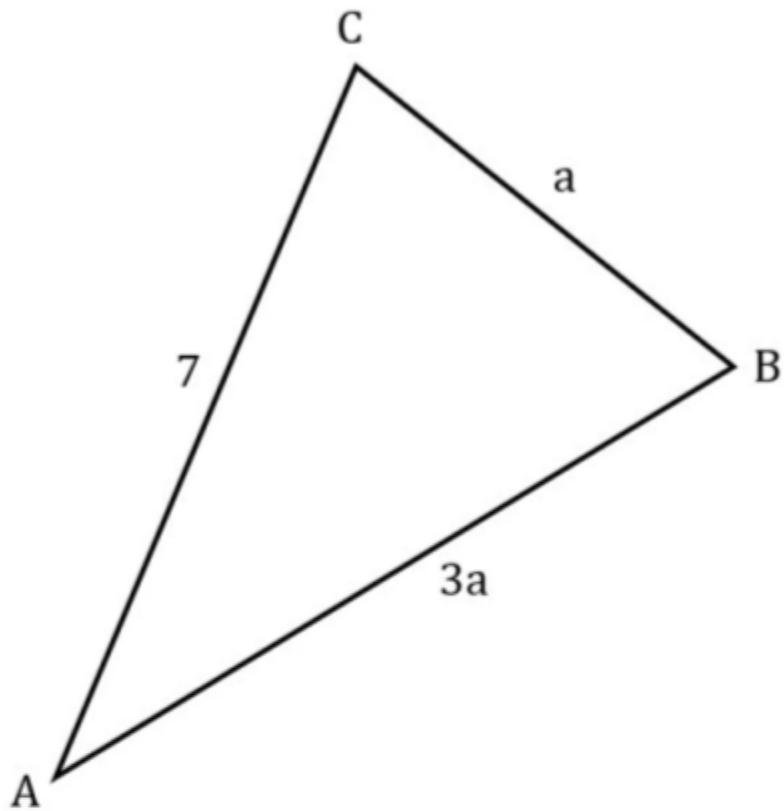
Question 2

Given that $\sin \theta = \frac{3}{5}$, where $\frac{\pi}{2} < \theta < \pi$, find the possible values of $\cos \theta$ and $\tan \theta$.

[3 marks]

Question 3

The following triangle shows triangle ABC, with $AB = 3a$, $BC = a$ and $AC = 7$.

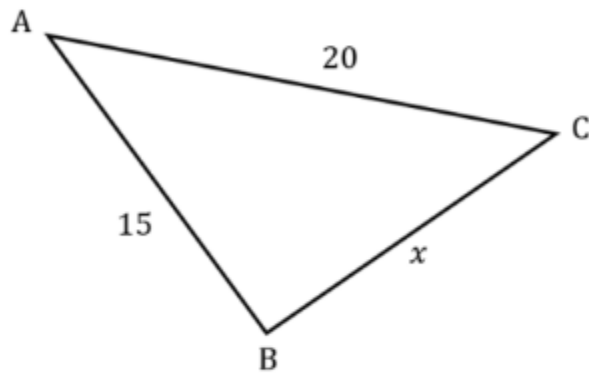


Given that $\cos \widehat{ABC} = \frac{1}{2}$, find the area of the triangle. Give your answer in the form $\frac{p\sqrt{3}}{r}$ where $p, q \in \mathbb{R}$.

[7 marks]

Question 4

The following triangle shows triangle ABC, with $AB = 15$, $AC = 20$, $BC = x$.



(a) Given that $\cos \widehat{BAC} = \frac{2}{3}$, find the value of $\sin \widehat{BAC}$.

[3 marks]

(b) Find the exact area of triangle ABC.

[3 marks]

(c) By finding the value of x , show that triangle ABC is isosceles.

[3 marks]

Question 5

A sector of a circle, OPQ , is such that it has radius 3.4 cm and the angle at its centre, O , is $\frac{3\pi}{4}$ radians.

- (i) Find the length of the arc PQ .
- (ii) Find the area of the sector OPQ .

[4 marks]

Question 6

Two non-congruent triangles both have sides $AB = 5.3$ cm, $BC = 6.4$ cm and $\widehat{ACB} = 38^\circ$.

- (i) Show that the angle \widehat{BAC} for one of the triangles is 132° , to 3 significant figures.
- (ii) Find the angle \widehat{ABC} for the other triangle.

[4 marks]

Question 7

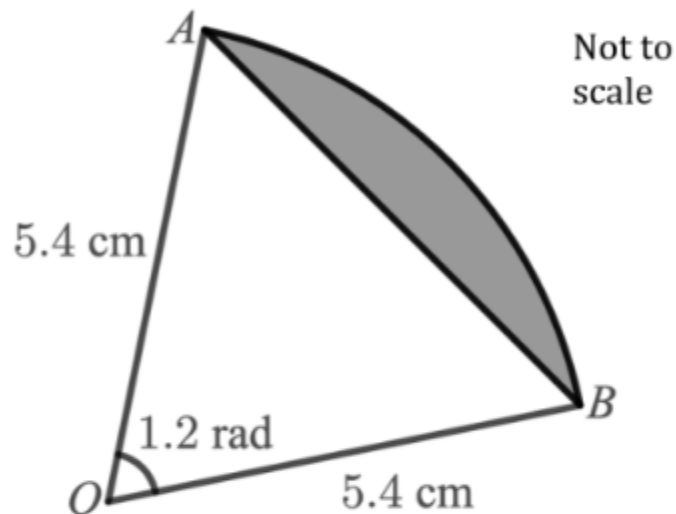
A right-angled triangle has hypotenuse 8cm. One of its other sides is 5cm.

Find exact values for $\sin \theta$, $\cos \theta$ and $\tan \theta$, where θ is the smallest angle in the triangle.

[6 marks]

Question 8

The diagram below shows the sector of a circle OAB .



- (a) (i) Find the area of the sector OAB , giving your answer to 3 significant figures.
- (ii) Find the area of the triangle OAB , giving your answer to 3 significant figures.
- (iii) Find the area of the shaded segment, giving your answer to 3 significant figures.

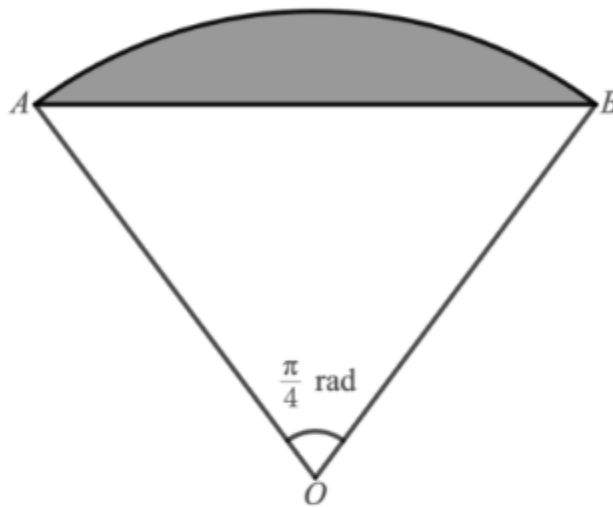
[5 marks]

- (b) (i) Find the length of the arc AB .
- (ii) Find the perimeter of the sector OAB .

[3 marks]

Question 9

The canopy of a parachute and the outermost connecting cords form a sector of a circle as shown in the diagram below, with the parachutist modelled as a particle at point O .



Not to
scale

The area of the sector OAB is $\frac{0.1\pi}{200}$ m².

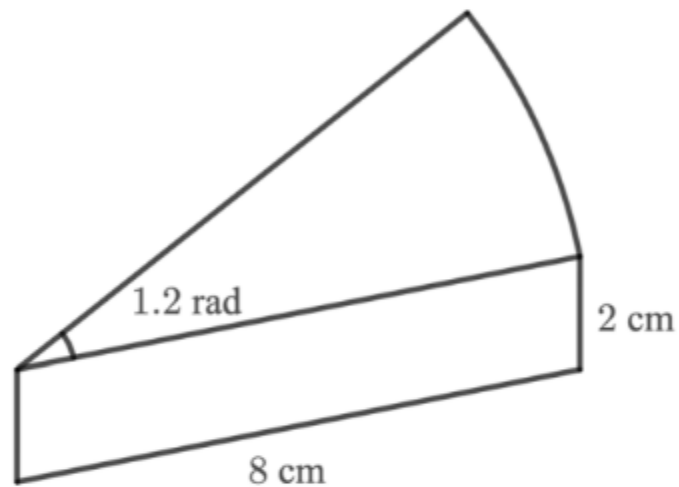
Find the length of one of the connecting cords on the parachute.

[3 marks]

Question 10

A plastic puzzle piece is in the form of a prism with a cross-section that is the sector of a circle, as shown in the diagram below. The radius of the sector is 8 cm, and the angle at the centre is 1.2 radians.

The height of the puzzle piece is 2 cm.



Not to
scale

- (i) Work out the area of the cross-section.
- (ii) Hence, or otherwise, work out the volume of the puzzle piece.

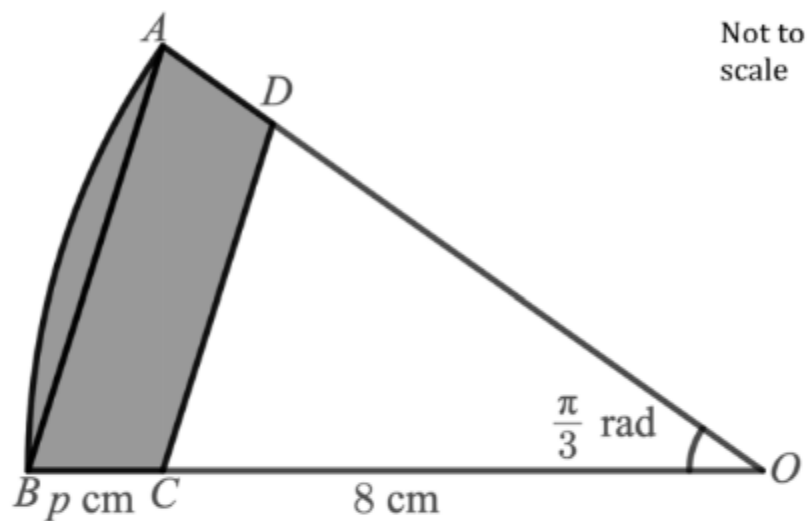
[3 marks]

Question 11

The circle sector OAB is shown in the diagram below.

The angle at the centre is $\frac{\pi}{3}$ radians, and the line segments OC and BC have lengths of 8 cm and p cm respectively.

Additionally, CD is parallel to AB , so that $AD = BC$ and $OD = OC$.



(a) Show that the area of the sector OAB is $\frac{\pi}{6}(p+8)^2 \text{ cm}^2$.

[2 marks]

(b) Show that the area of the triangle OCD is $16\sqrt{3} \text{ cm}^2$.

[2 marks]

(c) Given that the area of the shaded shape $ABCD$ is $\left(\frac{50\pi}{3} - 16\sqrt{3}\right) \text{ cm}^2$, find the value of p .

[4 marks]