



# Cambridge IGCSE™

---

**GEOGRAPHY**

**0460/11**

Paper 1 Geographical Themes

**October/November 2025**

INSERT

**1 hour 45 minutes**

---

**INFORMATION**

- This insert contains additional resources referred to in the questions.
- You may annotate this insert and use the blank spaces for planning. **Do not write your answers** on the insert.

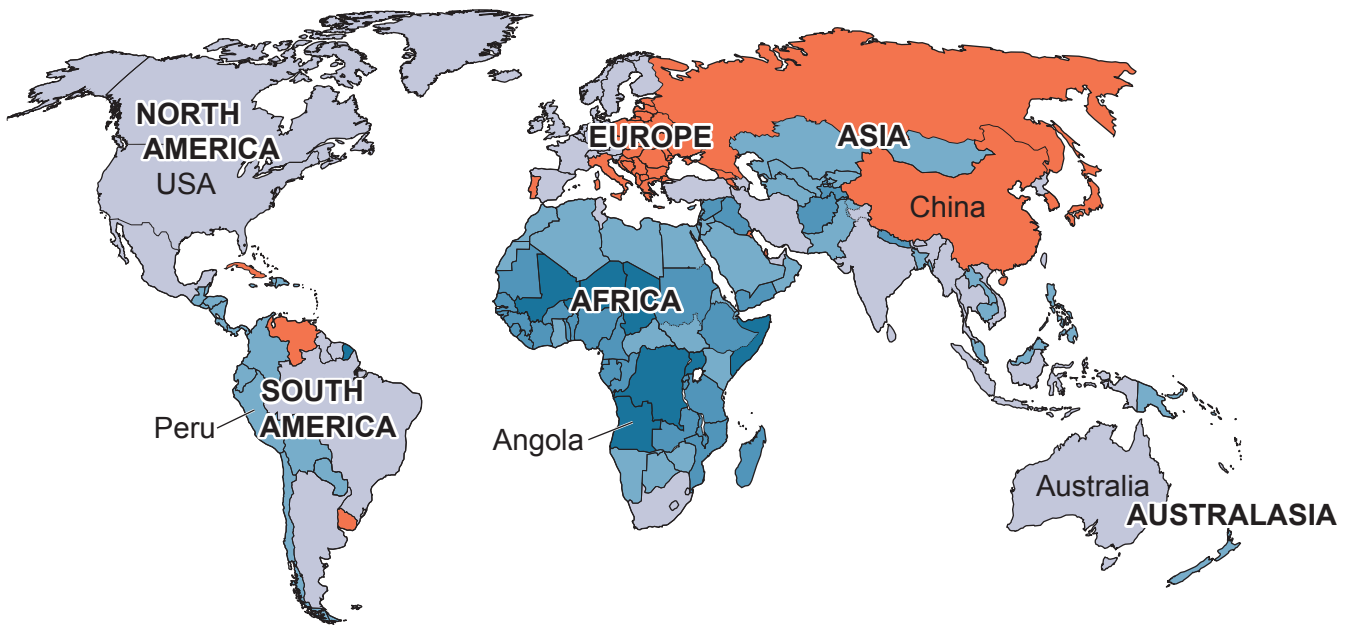


---

This document has **12** pages. Any blank pages are indicated.

Fig. 1.1 for Question 1

Average annual population growth rates between 1950 and 2100 (estimated)



**Key**

average annual growth rate (%)






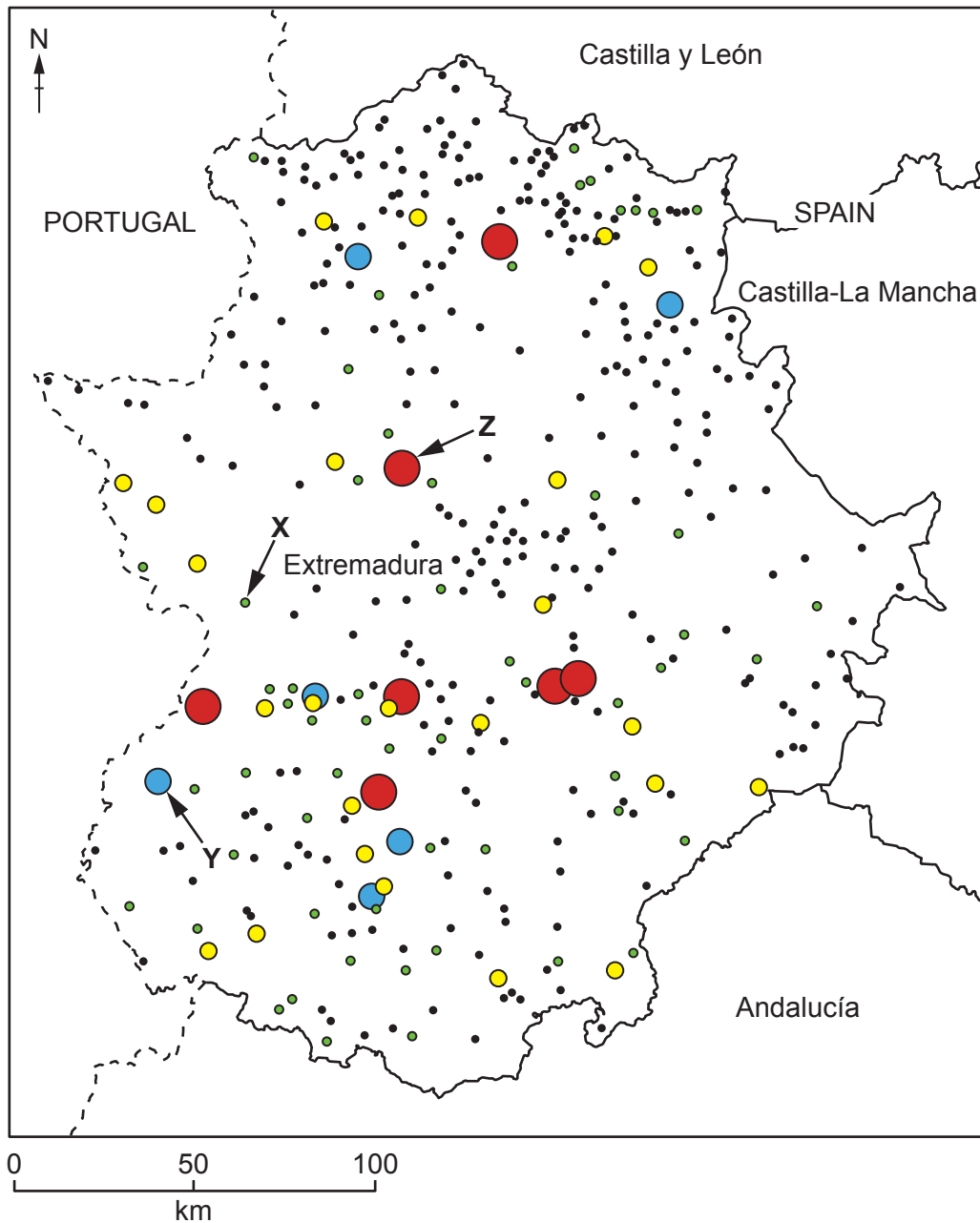
-  below 0 (population decrease)
-  0–0.9
-  1–1.9
-  2–2.9
-  3 and over

Fig. 2.1 for Question 2

A map showing information about settlements in Extremadura, a region of Spain



**Key**

settlements (population)

- 0–1999
- 2000–4999
- 5000–9999
- 10 000–19 999
- over 20 000

--- international border

— regional border

**Fig. 2.2 for Question 2**

**A photograph showing a function of a settlement**



**Fig. 2.3 for Question 2**

**A photograph showing a function of a settlement**



Fig. 2.4 for Question 2

A photograph showing a function of a settlement



**Fig. 3.1 for Question 3**

**A photograph of an area of sand dunes**



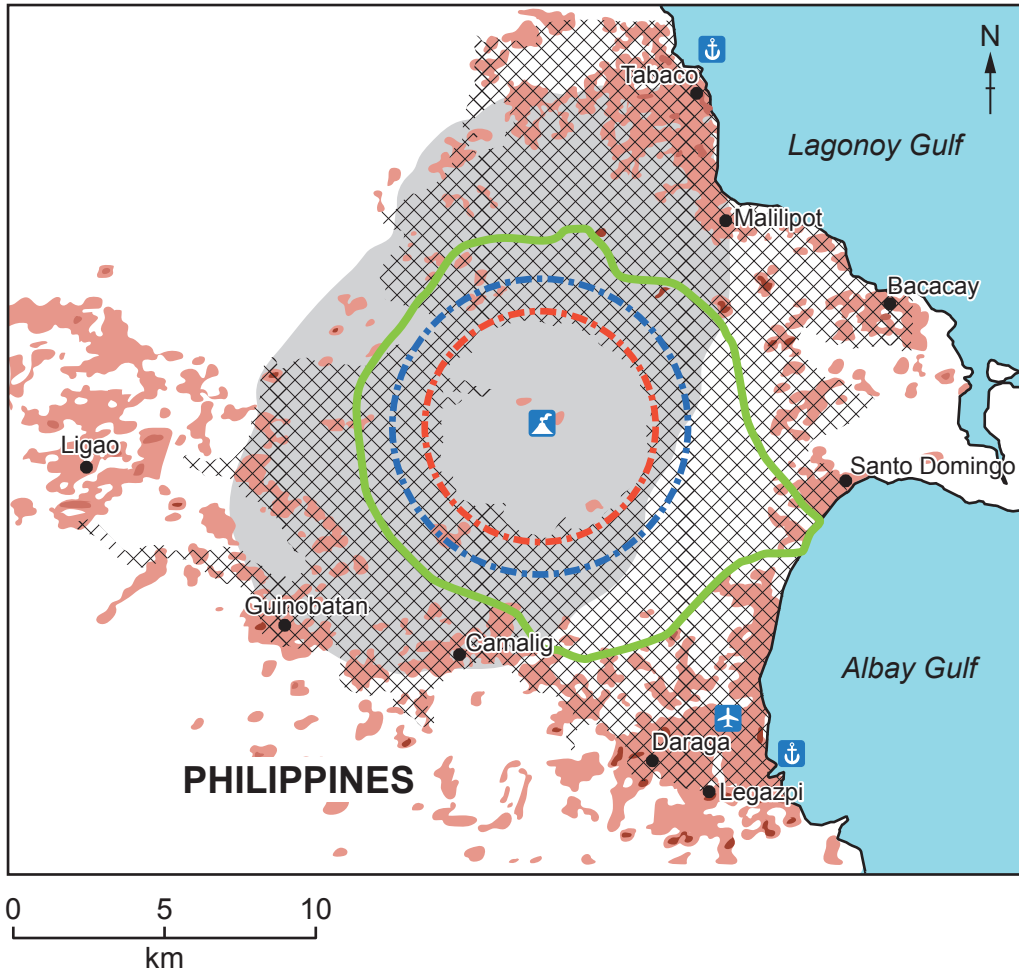
**Fig. 3.2 for Question 3**

**A photograph of a coastline with bays and headlands**













Fig. 4.2 for Question 4

A map showing information about an eruption of Mayon Volcano in January 2018



**Key**

-  Mayon Volcano
  -  8 km permanent danger zone
  -  10 km danger zone
  -  area prone to lahar
  -  area prone to pyroclastic flow
  -  area prone to heavy ash fallout
  -  port
  -  airport
  -  settlement
- number of inhabitants  
  
 0                      2500                      5000

**Fig. 5.1 for Question 5**

**A photograph of a manufacturing industry**



**Fig. 6.1 for Question 6**

**A photograph of an area in the UK where commercial farming takes place**







**BLANK PAGE**

---

The boundaries and names shown, the designations used and the presentation of material on any maps contained in this question paper/insert do not imply official endorsement or acceptance by Cambridge Assessment International Education concerning the legal status of any country, territory, or area or any of its authorities, or of the delimitation of its frontiers or boundaries.

Permission to reproduce items where third-party owned material protected by copyright is included has been sought and cleared where possible. Every reasonable effort has been made by the publisher (UCLES) to trace copyright holders, but if any items requiring clearance have unwittingly been included, the publisher will be pleased to make amends at the earliest possible opportunity.

To avoid the issue of disclosure of answer-related information to candidates, all copyright acknowledgements are reproduced online in the Cambridge Assessment International Education Copyright Acknowledgements Booklet. This is produced for each series of examinations and is freely available to download at [www.cambridgeinternational.org](http://www.cambridgeinternational.org) after the live examination series.

Cambridge Assessment International Education is part of Cambridge Assessment. Cambridge Assessment is the brand name of the University of Cambridge Local Examinations Syndicate (UCLES), which is a department of the University of Cambridge.